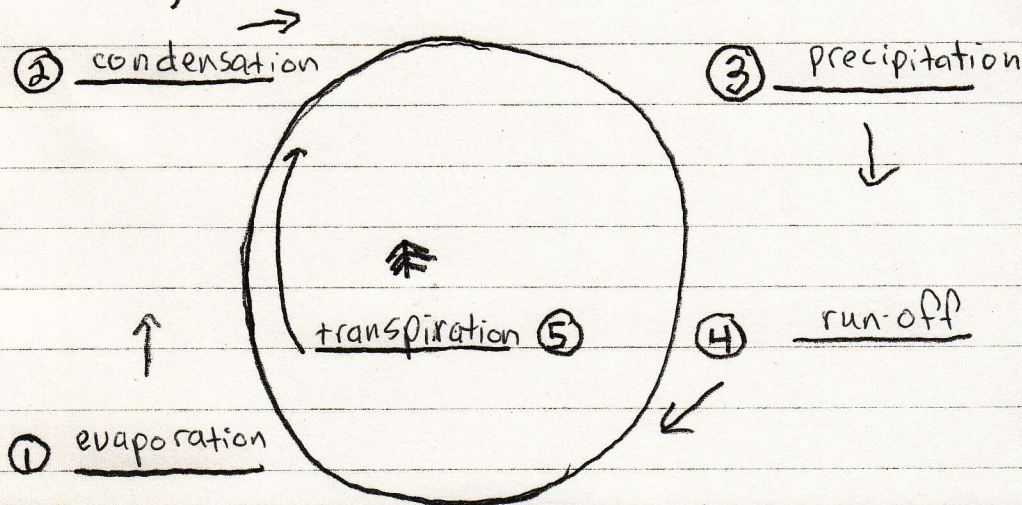


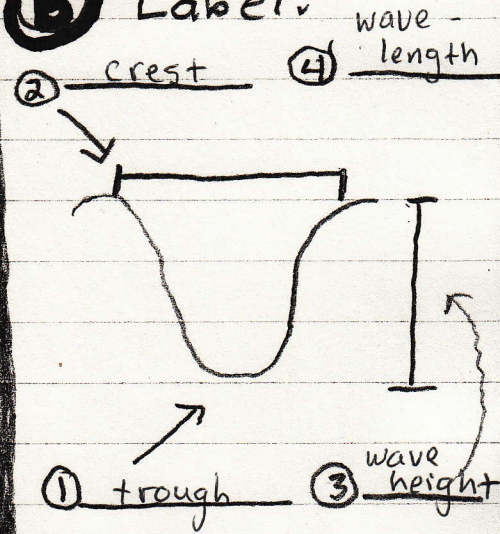
Name: _____

Waves + H₂O Cycle

A Draw and Label the water cycle.



B Label.

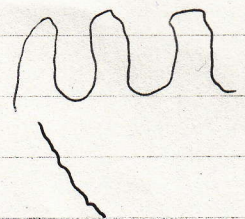


Name: _____

Shoreline Changes

A. How are steep cliffs created near the ocean?

1. Large, energy filled waves
2. Steep ocean seabed



B. How are sandy beaches created near the ocean?

1. Small, energy "less" waves
2. Gentle ocean seabed



C. How do people try to protect beaches?

1. jetties
2. sea wall
3. break waters